


3 hoeveel kost het?
vul in.



10 cent




5 cent




2 cent




5 cent



2 cent



..... cent




..... cent



..... cent



..... cent




..... cent

4 kijk bij opgave 3.
hoeveel kost het?
vul in.



..... cent



..... cent



..... cent



..... cent




..... cent

5 kijk bij opgave 3.
hoeveel kost het?
vul in.



..... cent



..... cent



..... cent